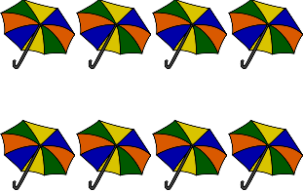




Dividing by 2, by 5, and by 10

Practice Questions

1. Divide. Use the array to help you.

a. $8 \div 2 =$	b. $40 \div 5 =$	c. $20 \div 10 =$
		

2. Divide.

a. $18 \div 2$

b. $5 \div 5$

c. $10 \div 2$

d. $60 \div 10$

e. $20 \div 5$

f. $6 \div 2$

g. $80 \div 10$

h. $35 \div 5$

3. 16 children work in groups of two. How many groups are there?

Pictures <i>(Draw an array)</i>	Numbers <i>(Division Sentence)</i>	Words <i>(Concluding Sentence)</i>

4. Draw an array to show each division sentence.

a. $13 \div 2$

b. $19 \div 5$

c. $32 \div 10$

d. $33 \div 5$

5. Jerry bought 3 packages of seeds. Each package had 10 seeds inside. Jerry and 4 friends share the seeds equally. How many seeds does each person get? *Show your work.*

Pictures <i>(Draw two arrays)</i>	Numbers <i>(Multiplication and Division Sentence)</i>	Words <i>(Concluding Sentence)</i>