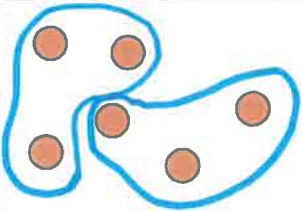
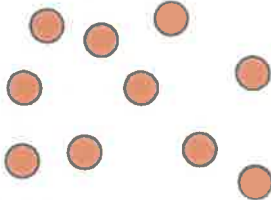
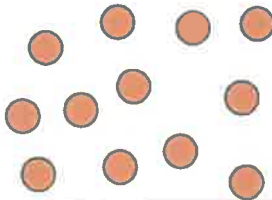
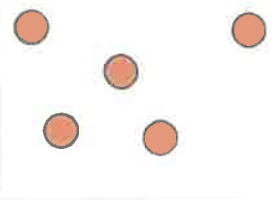


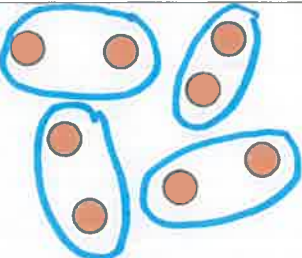
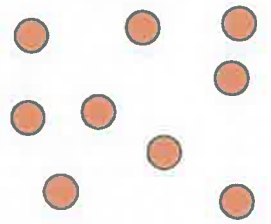
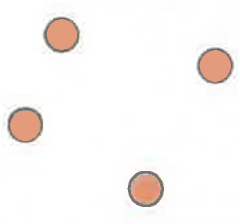
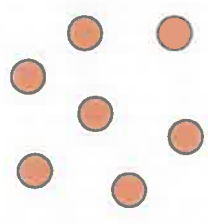
Unit 4: Multiplication and Division

Lesson 8: Modelling Division – Practice Questions

1. Figure out how many groups there are and then write a division sentence. The first one is done for you.

Make groups of 3	Make groups of 2.	Make groups of 4.	Make groups of 1.
			
2 groups of 3 $6 \div 3 = 2$			

2. Figure out how many items are in each group and then write a division sentence. The first one is done for you.

Make 4 equal groups.	Make 3 equal groups.	Make 2 equal groups.	Make 1 equal group.
			
4 groups of 2 $8 \div 4 = 2$			

3. Juan has 32 Pokémon erasers and he shares them equally with three friends (4 people altogether). How many Pokémon erasers does each person get?

pictures

numbers

words

4. Levana has 24 apples and she puts them into bags. Each bag has six apples inside. How many bags did Levana pack?

pictures

numbers

words