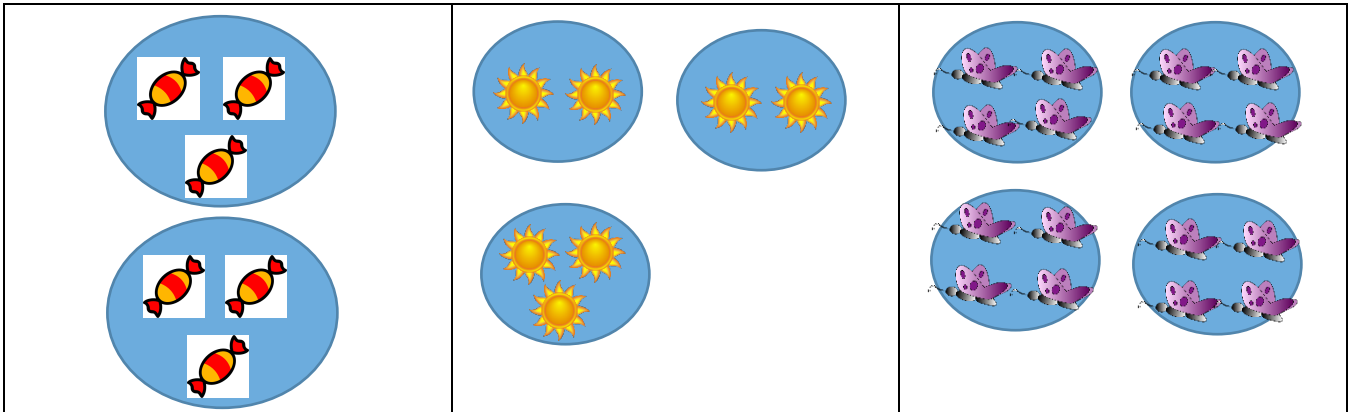


Unit 4: Multiplication and Division

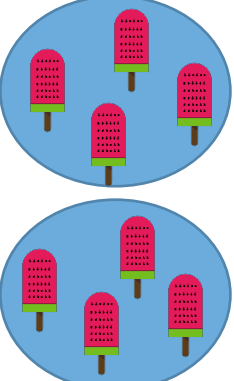
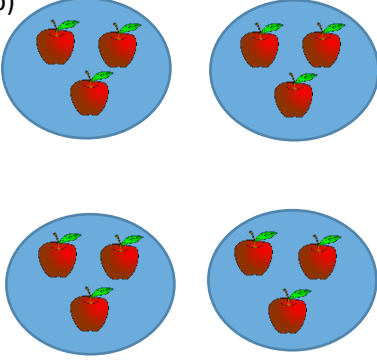
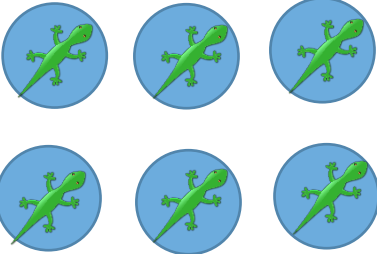
Lesson 1: Relating Multiplication and Addition

Practice Questions

1. For which pictures can you write a multiplication sentence?



2. Write an addition sentence and a multiplication sentence for each picture. The first one is an example for you to follow. The question has already been answered.

<p>a)</p>  <p>$4 + 4 = 8$ $2 \times 4 = 8$ (2 groups of 4 equals 8)</p>	<p>b)</p> 	<p>c)</p> 
--	---	---

3. Write a multiplication sentence for each addition sentence, then draw a picture.

a. $6 + 6 + 6 = 18$

b. $1 + 1 + 1 + 1 = 4$

c. $4 + 4 = 8$

4. Write an addition sentence for each multiplication sentence, then draw a picture.

a. $3 \times 3 = 9$

b. $4 \times 4 = 16$

5. Can you write a multiplication sentence for this picture? How do you know?

